

SOLUTIONS TO PRACTICE QUESTIONS FOR THE FINAL EXAM

1. $16x^2 - 4y^8 = 4(4x^2 - y^8) = 4((2x)^2 - (y^4)^2) = 4(2x - y^4)(2x + y^4)$

2.
$$\left(\frac{36a^{-4}b^{10}c^2}{a^2c^{-6}}\right)^{-1/2} = (36a^{-6}b^{10}c^8)^{-1/2} = (36)^{-1/2}(a^{-6})^{-1/2}(b^{10})^{-1/2}(c^8)^{-1/2} =$$

$$= \frac{1}{(36)^{1/2}} a^3 b^{-5} c^{-4} = \frac{1}{\sqrt{36}} \cdot \frac{a^3}{b^5 c^4} = \frac{a^3}{6b^5 c^4}$$

3.
$$\frac{3x}{3x+1} - \frac{x}{x-2} = \frac{3x}{(3x+1)} \cdot \frac{(x-2)}{(x-2)} - \frac{x}{(x-2)} \cdot \frac{(3x+1)}{(3x+1)} =$$

$$= \frac{3x(x-2) - x(3x+1)}{(3x+1)(x-2)} = \frac{3x^2 - 6x - 3x^2 - x}{(3x+1)(x-2)} = \frac{-7x}{(3x+1)(x-2)}$$

4.
$$(2x+1)^3(2)(3x-5)(3) + (3x-5)^2(3)(2x+1)^2(2)$$

$$= 6[(2x+1)^3(3x-5) + (3x-5)^2(2x+1)^2]$$

$$= 6(2x+1)^2[(2x+1)(3x-5) + (3x-5)^2]$$

$$= 6(2x+1)^2(3x-5)[(2x+1) + (3x-5)]$$

$$= 6(2x+1)^2(3x-5)(5x-4)$$

$$= 6(3x-5)(5x-4)(2x+1)^2$$

5.
$$\frac{xy^{-1}}{(x+y)^{-1}} = \frac{\frac{x}{y}}{\frac{1}{(x+y)}} = \frac{x}{y} \cdot \frac{(x+y)}{1} = \frac{x(x+y)}{y}$$

6. $A = P(1 + rt)$
 $A = P + Prt$
 $A - P = Prt$
 $\frac{A - P}{Pr} = \frac{Prt}{Pr}$
 $\frac{A - P}{Pr} = t$
 $t = \frac{A - P}{Pr}$

7.
$$\frac{4}{2p-3} + \frac{10}{4p^2-9} = \frac{1}{2p+3}$$

$$\frac{4}{2p-3} + \frac{10}{(2p-3)(2p+3)} = \frac{1}{2p+3}$$

$$(2p-3)(2p+3) \cdot \left[\frac{4}{2p-3} + \frac{10}{(2p-3)(2p+3)} \right] = \left[\frac{1}{2p+3} \right] \cdot (2p-3)(2p+3)$$

$$(2p+3) \cdot 4 + 10 = 1 \cdot (2p-3)$$

$$4(2p+3) + 10 = (2p-3)$$

$$8p + 12 + 10 = 2p - 3$$

$$8p - 2p = -3 - 12 - 10$$

$$6p = -25$$

$$p = -\frac{25}{6}$$

8.
$$\frac{\sqrt{x}+5}{\sqrt{x}-5} = \frac{(\sqrt{x}+5)(\sqrt{x}+5)}{(\sqrt{x}-5)(\sqrt{x}+5)} =$$

$$= \frac{x+5\sqrt{x}+5\sqrt{x}+25}{x+5\sqrt{x}-5\sqrt{x}-25} = \frac{x+10\sqrt{x}+25}{x-25}$$

9. $t = \#$ of hours the other person takes to complete the job.

fraction from 1st person + fraction from 2nd person = whole job

$$\left(\frac{1}{6}\right) \frac{\text{job}}{\text{hour}} \cdot 4\text{hours} + \left(\frac{1}{t}\right) \frac{\text{job}}{\text{hour}} \cdot 4\text{hours} = \left(\frac{1}{4}\right) \frac{\text{job}}{\text{hour}} \cdot 4\text{hours}$$

$$\left(\frac{2}{3}\right) \text{job} + \left(\frac{4}{t}\right) \text{job} = 1 \text{job}$$

$$\frac{2}{3} + \frac{4}{t} = 1$$

$$3t\left(\frac{2}{3} + \frac{4}{t}\right) = 1 \cdot 3t$$

$$2t + 12 = 3t$$

$$12 = t$$

$$t = 12$$

10.
$$\begin{cases} y = x + 1 \\ y^2 - x^2 = 145 \end{cases}$$

$$(x+1)^2 - x^2 = 145$$

$$x^2 + 2x + 1 - x^2 = 145$$

$$2x + 1 = 145$$

$$2x = 144$$

$$x = 72$$

11. let $t = \#$ hours truck has been traveling

$40t = 55(t-1)$	rate	time	distance
$40t = 55t - 55$	truck	40	t
$55 = 15t$	car	55	t - 1
			$55(t-1)$

$t = \frac{55}{15} = \frac{11}{3}$ hours, so distance is $40\left(\frac{11}{3}\right) = \frac{440}{3}$ miles

12. let $x = \#$ ml of the 50% solution

let $y =$ total # of ml

$$\begin{cases} x + 40 = y \\ x(.50) + 40(.20) = y(.25) \end{cases}$$

$$x(.50) + 8 = (x + 40)(.25)$$

$$.50x + 8 = .25x + 10$$

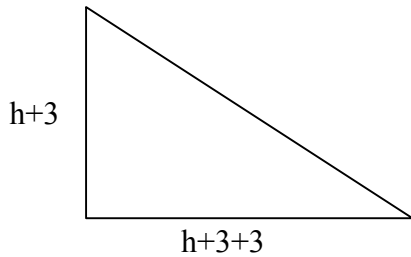
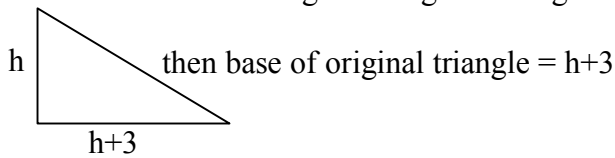
$$.25x = 2$$

$$x = 8 \text{ ml}$$

B

13.

Let h = height of original triangle



New:

Area of new triangle = 14 in^2

$$\frac{1}{2}(h+3)(h+6) = 14$$

$$(h+3)(h+6) = 28$$

$$h^2 + 3h + 6h + 18 = 28$$

$$h^2 + 9h - 10 = 0$$

$$(h+10)(h-1) = 0$$

$$h = -10, h = 1$$

Original height = 1 in.

Original base = $1 + 3 = 4 \text{ in.}$

A

14.

let t = number of years after 1980 and let V = value
 t is the independent variable and V is the dependent variable

points on line $\Rightarrow (1,54)$ and $(3,62)$

$$\text{slope} \Rightarrow m = \frac{62 - 54}{3 - 1} = \frac{8}{2} = 4$$

$$V - V_1 = m(t - t_1)$$

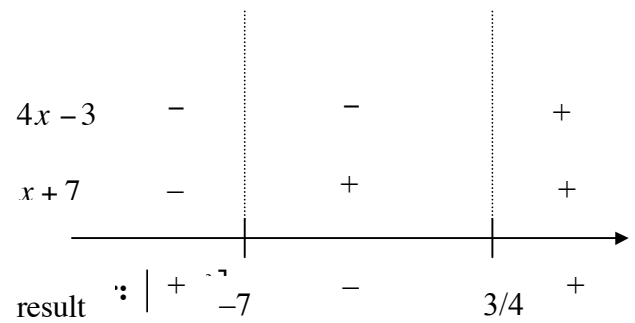
$$V - 54 = 4(t - 1)$$

$$V - 54 = 4t - 4$$

$$V = 4t + 50$$

A

15. $(4x - 3)(x + 7) \leq 0$



16.

$$|6 - 2x| \leq 3$$

$$-3 \leq 6 - 2x \leq 3$$

$$-9 \leq -2x \leq -3$$

$$\frac{9}{2} \geq x \geq \frac{3}{2}$$

C

$$\frac{3}{2} \leq x \leq \frac{9}{2}$$

17.

$A(1, -2)$, Midpoint $M(2, 3)$, $B(x, y)$

$$\text{Midpoint} \Rightarrow \left(\frac{x_1 + x_2}{2}, \frac{y_1 + y_2}{2} \right)$$

$$\text{Midpoint of } \overline{AB} \Rightarrow \left(\frac{1+x}{2}, \frac{-2+y}{2} \right) \Rightarrow (2, 3)$$

$$\frac{1+x}{2} = 2, \quad \frac{-2+y}{2} = 3$$

$$1+x = 4, \quad -2+y = 6$$

$$x = 3, \quad y = 8$$

so $B(3, 8)$

C

18.

$$\text{slope of line} \Rightarrow m = -\frac{1}{3}$$

$$\text{slope of line perpendicular} \Rightarrow m = 3$$

D

19.

$$2x - 3y = 7$$

$$-3y = -2x + 7$$

$$y = \frac{2}{3}x - \frac{7}{3}$$

$$\text{slope } m = \frac{2}{3}$$

$$\text{slope of parallel line } m = \frac{2}{3}$$

$$\text{point is } (2, -1); m = \frac{2}{3}$$

$$y = mx + b$$

$$-1 = \left(\frac{2}{3}\right)(2) + b$$

C

$$-1 = \frac{4}{3} + b$$

$$b = -\frac{7}{3}$$

$$\text{so } y = \frac{2}{3}x - \frac{7}{3}$$

20.

$$\text{Center} \Rightarrow (0, 2)$$

$$(x - h)^2 + (y - k)^2 = r^2$$

$$\text{radius} = 2$$

$$(x - 0)^2 + (y - 2)^2 = 2^2$$

$$x^2 + (y - 2)^2 = 4$$

B

$$x^2 + y^2 - 4y + 4 = 4$$

$$x^2 + y^2 - 4y = 0$$

21.

$$f(x) = 1 - \sqrt{x}$$

$$g(x) = \frac{1}{x}$$

$$(g \circ f)(x) = g[f(x)] = g(1 - \sqrt{x}) = \frac{1}{1 - \sqrt{x}}$$

D

22.

$$f(x) = \frac{x}{x^2 + 1}$$

$$\frac{1}{f(3)} = \frac{1}{\frac{1}{(3)^2 + 1}} = \frac{1}{\frac{1}{10}} = \frac{10}{1}$$

D

23.

$$y = \frac{1}{3x - 2}$$

$$x = \frac{1}{3y - 2}$$

$$x(3y - 2) = 1$$

$$3xy - 2x = 1$$

$$3xy = 1 + 2x$$

$$y = \frac{1 + 2x}{3x} = f^{-1}(x)$$

24.

$$f(x) = x^2 - 2x + 4$$

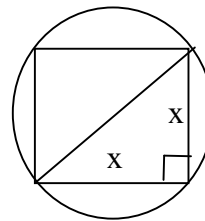
$$\frac{f(x+h) - f(x)}{h} = \frac{(x+h)^2 - 2(x+h) + 4 - (x^2 - 2x + 4)}{h}$$

A

$$= \frac{x^2 + 2xh + h^2 - 2x - 2h + 4 - x^2 + 2x - 4}{h} = \frac{2xh + h^2 - 2h}{h}$$

$$= \frac{h(2x + h - 2)}{h} = 2x + h - 2$$

25.



Let A = area of circle

$$\text{Area of circle} \Rightarrow A(r) = \pi r^2$$

$$\text{Diameter } (d) \text{ of circle} \Rightarrow x^2 + x^2 = d^2$$

$$2x^2 = d^2$$

$$d = \pm\sqrt{2x^2}$$

$$d = x\sqrt{2}$$

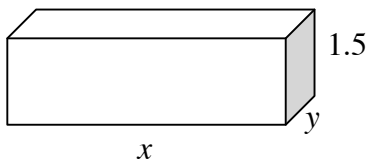
$$\text{Radius } (r) \text{ of circle} \Rightarrow r = \frac{x\sqrt{2}}{2}$$

$$\text{So, } A(x) = \pi \left(\frac{x\sqrt{2}}{2}\right)^2 = \pi \left(\frac{x^2(2)}{4}\right)$$

$$= \frac{\pi x^2}{2} \text{ or } \frac{\pi}{2} x^2$$

A

26.



$$\text{Volume} = 6 \text{ ft.}^3$$

$$xy(1.5) = 6$$

$$y = \frac{6}{1.5x}$$

$$y = \frac{4}{x}$$

B

27.

$$T = k \frac{a^3}{\sqrt{d}}$$

$$4 = k \frac{2^3}{\sqrt{9}}$$

$$4 = k \frac{8}{3}$$

$$k = \frac{4}{1} \cdot \frac{3}{8}$$

$$k = \frac{3}{2}$$

$$T = \frac{3}{2} \cdot \frac{(-1)^3}{\sqrt{4}}$$

$$T = \frac{3}{2} \cdot \left(-\frac{1}{2}\right)$$

$$T = -\frac{3}{4}$$

A

28.

$$x^2 - 4x - 2y - 4 = 0$$

$$2y = x^2 - 4x - 4$$

$$2y = (x^2 - 4x + 4) - 4 - 4$$

$$2y = (x - 2)^2 - 8$$

$$y = \frac{1}{2}(x - 2)^2 - 4$$

$$y = a(x - h)^2 + k$$

$$\text{Vertex}(h, k) = (2, -4)$$

29.

$$\text{Vertex} \Rightarrow V(0, 2)$$

$$y = a(x - h)^2 + k$$

$$\text{point on parabola} \Rightarrow (1, 0)$$

$$y = a(x - 0)^2 + 2$$

$$y = ax^2 + 2$$

$$0 = a(1)^2 + 2$$

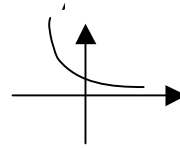
$$a = -2$$

$$y = -2x^2 + 2$$

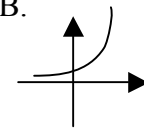
B

30.

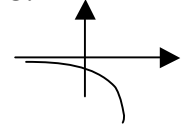
(A)



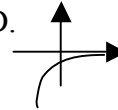
B.



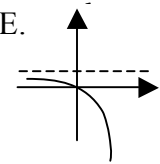
C.



D.



E.



31.

$$\log_b y^3 + \log_b y^2 - \log_b y^4 = \log_b (y^3 y^2) - \log_b y^4$$

$$= \log_b y^5 - \log_b y^4 = \log_b \left(\frac{y^5}{y^4} \right) = \log_b y$$

B

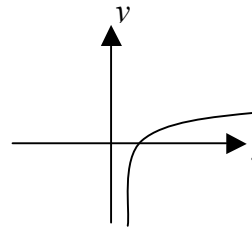
32.

$$f(x) = \log_a x \text{ if } a > 1$$

$$\text{example: if } a = 2, \text{ then } f(x) = \log_2 x,$$

D

$$\text{Graph of } y = \log_2 x \Rightarrow 2^y = x$$



f is increasing, f does not have a

x -intercept (the x -int. is $(1, 0)$), f does not have

a y -intercept, the domain of f is $(0, \infty)$.

33.

$$\log \left(\frac{432}{(\sqrt{.095})(\sqrt[3]{72.1})} \right) = \log \left(\frac{432}{(.095)^{\frac{1}{2}}(72.1)^{\frac{1}{3}}} \right)$$

$$= \log 432 - \left(\log \left[(.095)^{\frac{1}{2}}(72.1)^{\frac{1}{3}} \right] \right)$$

$$= \log 432 - \left(\log (.095)^{\frac{1}{2}} + \log (72.1)^{\frac{1}{3}} \right)$$

$$= \log 432 - \frac{1}{2} \log .095 - \frac{1}{3} \log 72.1$$

B