

Lesson 36 MA 152, Section 3.1


I Quadratic Functions

A **quadratic function** of the form $y = f(x) = ax^2 + bx + c$, where a , b , and c are real numbers (general form) has the shape of a **parabola** when graphed. The parabola will open **upward** if the value of a is positive and downward if it is negative. The **vertex** is the point or ordered pair where the parabola 'turns'.

Ex 1: Graph the parabola $y = -\frac{1}{2}x^2 - x + \frac{3}{2}$. Find its vertex and direction of opening.

We will use a table of values and plot the points.

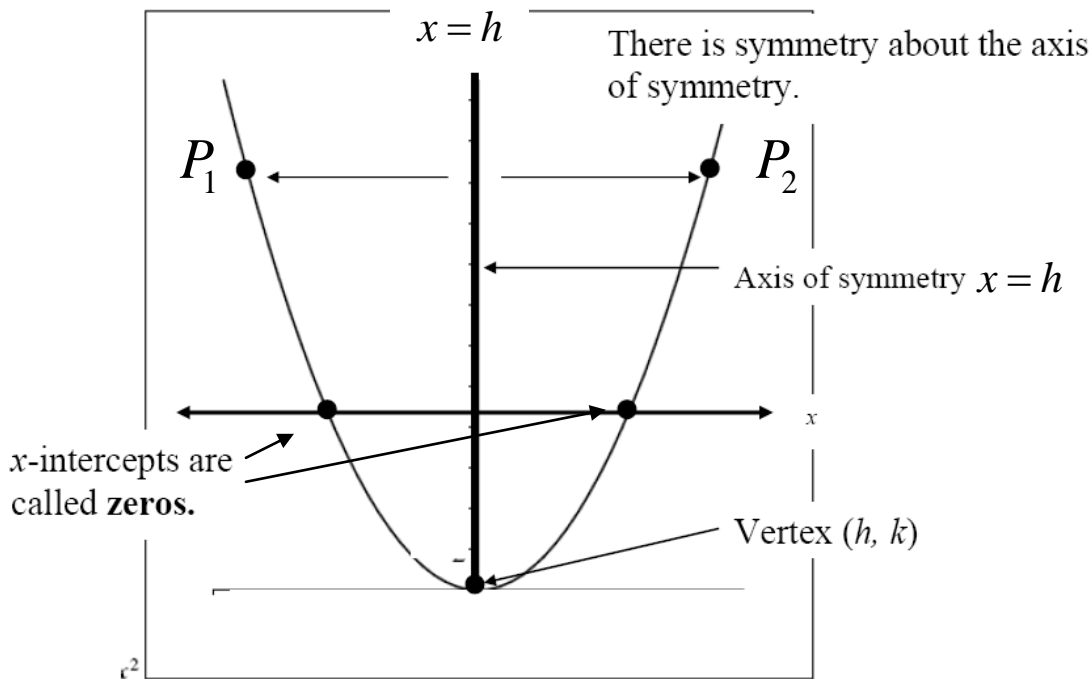
x	y
0	$3/2$
1	0
-1	2
2	$-5/2$
-2	$3/2$
-3	0



This method is tedious. It will be easier to know how to find the vertex. We could also find intercepts and use symmetry. Notice, the graph is symmetric about a vertical line through the vertex.

The **vertex** will be an ordered pair (h, k) .

The **axis of symmetry** is a vertical line with through the vertex. Points have symmetry (equal distance) left and right about this vertical line. The equation will be $x = h$.



Look at the graph of the example on page 1 and answer the following questions.

- (1) zeros:
- (2) axis of symmetry:
- (3) a pair of symmetric points

If a ‘completing the square’ process is used on the general form, equations for h and k of the vertex can be found.

$$y = ax^2 + bx + c$$

$$y = a\left(x^2 + \frac{b}{a}x\right) + c$$

$$y = a\left(x^2 + \frac{b}{a}x + \left(\frac{b}{2a}\right)^2\right) + c - a\left(\frac{b}{2a}\right)^2$$

$$\text{Let } k = c - a\left(\frac{b}{2a}\right)^2$$

$$y = a\left(x + \frac{b}{2a}\right)^2 + k$$

$$\text{Let } h = -\frac{b}{2a}$$

$$y = a(x - h)^2 + k$$

MA 15300 students are required to know how to complete the square to find a standard quadratic equation from a general quadratic equation.

Students in MA 15200 are not required to know how to do this.

Standard Equation for a Parabola:

If the vertex of a parabola is (h, k) and the parabola opens upward or downward, the standard equation of the parabola has the form $y = a(x-h)^2 + k$. If a is positive, the parabola opens upward, negative it opens downward.

Ex 2: For each parabola, find :

- 1) The vertex
- 2) Equation for the axis of symmetry
- 3) Direction of opening
- 4) Domain and range
- 5) y-intercept
- 6) A point corresponding to the y-intercept that has the same y-coordinate

The standard form of the equation of the parabola that was graphed in Ex. 1 is

$$y = -\frac{1}{2}(x+1)^2 + 2.$$

a) $f(x) = 2(x+4)^2 + 6$

b) $f(x) = -\frac{1}{4}(x+2)^2$

From the process on page 2, you can see that the coordinates of the vertex can be found from the general form by the following equations.

$$h = -\frac{b}{2a}$$


$$k = c - \frac{b^2}{4a}$$

Rather than finding k by using the formula above, it is easier to substitute the value of h for x in the quadratic equation and solve for y . $k = f(h)$

Ex 3: Find the vertex and axis of symmetry of each parabola. Write equations in standard form.

a) $f(x) = 2x^2 - 4x + 7$



b) $f(x) = -\frac{1}{3}x^2 + 8x - 2$




Ex 4: Graph the parabola by finding the vertex and intercepts. Use symmetry. Describe axis of symmetry, vertex, domain and range (using interval notation).

$$y = \frac{1}{2}x^2 - 2x + \frac{3}{2}$$

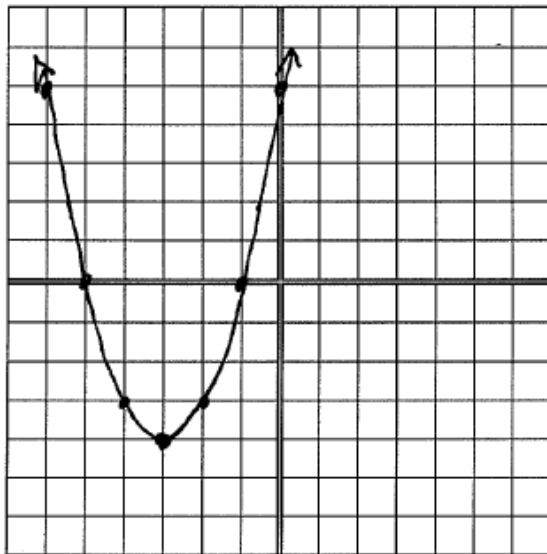
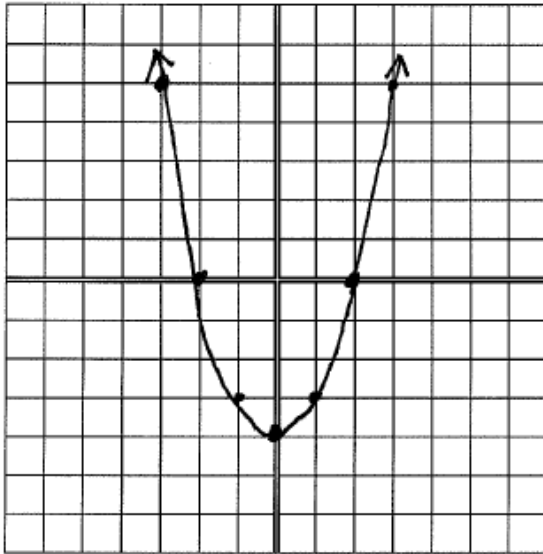
$$y = 16 - (x+1)^2$$



$$y = (x - 2)^2 - 4$$



Ex 5: From each parabola, give the equation in standard form. Assume the value of a is 1.



Minimums and Maximums:

If a parabola opens upward, its vertex is the location of a **relative minimum**. If it opens downward, its vertex is the location of a **relative maximum**. If the vertex is (h, k) , the maximum or minimum value is $k = f(h)$ and it occurs when $x = h$.

Ex 6: For each quadratic function describe if it has a maximum or minimum, what the maximum or minimum value is and where it occurs, and the domain and range of the function (using interval notation).

a) $f(x) = -3x^2 + 12x - 11$

b) $g(x) = \frac{1}{2}x^2 + 4x + 6$

Ex 7: Write an quadratic function (in standard form) that has the same shape as $g(x) = 2x^2$, but with a vertex $(-3, 12)$.

Finding a quadratic function using the vertex and a second point:

The equation for a quadratic function can be found if the vertex and one other point of the parabola is known. Replace x , y , h , and k with the correct values and solve for a in $f(x) = a(x - h)^2 + k$.

Ex 8: Find equation for each in standard form.

a) $V(2, -3)$, $P(1, 4)$

b) $V(9, -1)$, x -intercept is 4

Ex 8: A human cannonball shoots out of a cannon and the parabolic path he travels is given by

$$f(x) = -0.0125x^2 + x + 5.$$

- a) What is the maximum height above ground and how far from the beginning (horizontally) does this occur?

- b) To the nearest tenth of a foot, if there was no net, how far away (horizontal direction) would he land?

- c) How far above the ground was the cannon when it was fired?

Ex 9: Find a pair of number whose sum is 20 and whose product is as large as possible (a maximum). What is this maximum product?