

# SOLUTION KEY

MA 161-161E

EXAM 3

SPRING 1999

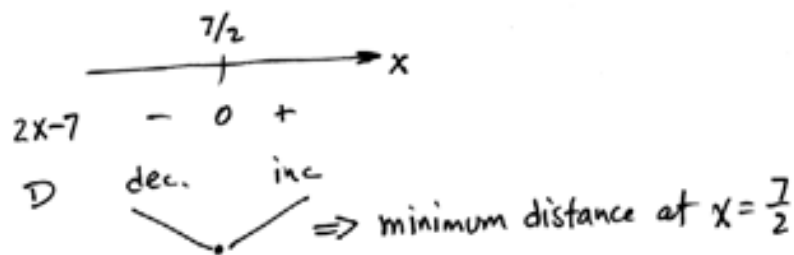
1. The shortest distance of a point on the graph of  $y = \sqrt{x}$  to the point  $(4, 0)$  is equal to

$$D = \sqrt{(x-4)^2 + (\sqrt{x}-0)^2}$$

$$= \sqrt{x^2 - 7x + 16}$$

$$\frac{dD}{dx} = \frac{2x-7}{2\sqrt{x^2-7x+16}}$$

$$\frac{dD}{dx} = 0 \rightarrow 2x-7=0 \rightarrow x = 7/2$$



A.  $2\sqrt{2}$

B.  $\frac{\sqrt{15}}{2}$

C. 2

D. 3

E.  $\frac{5}{2}$

$$D\left(\frac{7}{2}\right) = \sqrt{\left(\frac{7}{2}-4\right)^2 + \left(\sqrt{\frac{7}{2}}\right)^2}$$

$$= \sqrt{\frac{1}{4} + \frac{7}{2}} = \sqrt{\frac{15}{4}}$$

$$= \frac{\sqrt{15}}{2}$$

2.  $\lim_{x \rightarrow -\infty} \frac{6x + 4x^2 + 5x^3}{7x^3 - 3x^2 - 14} =$

A.  $\frac{6}{7}$

B.  $\frac{4}{7}$

C.  $\frac{5}{7}$

D.  $-\frac{5}{7}$

E. Does not exist

Note: degrees of numerator and denominator are equal (3).

$\therefore$  limit is  $\frac{5}{7}$

Alternate solution: divide numerator and denominator by  $x^3$

$$\lim_{x \rightarrow -\infty} \frac{\frac{6}{x^2} + \frac{4}{x} + 5}{7 - \frac{3}{x} - \frac{14}{x^2}} = \frac{0+0+5}{7-0-0} = \frac{5}{7}$$

3. All the inflection points of the graph of  $f(x) = x^4 - 6x^2$  occur at

$$f'(x) = 4x^3 - 12x$$

$$f''(x) = 12x^2 - 12 = 0 \Rightarrow x = \pm 1$$



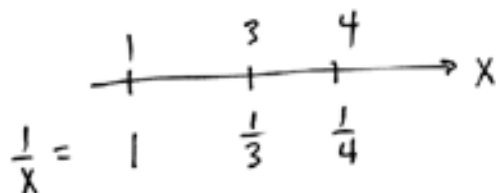
$$12(x^2-1) \quad + \quad 0 \quad - \quad 0 \quad +$$

$\Rightarrow$  inflection pts occur at  $x=1$  and at  $x=-1$ .

A.  $x = 0, 3$ B.  $x = 1$ C.  $x = -1$ D.  $x = -1, 1$ 

E. none

4. Find the lower sum  $L_f(P)$  for  $\int_1^4 \frac{1}{x} dx$  where  $P = \{1, 3, 4\}$ .



$$\frac{1}{x} =$$

$\frac{1}{x}$  is a decreasing

function on  $[1, 4]$ ,

so minimum of

$\frac{1}{x}$  occurs at right

end pts.

A.  $\frac{5}{12}$ B.  $\frac{7}{12}$ C.  $\frac{3}{4}$ D.  $\frac{11}{12}$ E.  $\ln 4$ 

$$\begin{aligned} L_f(P) &= \left(\frac{1}{3}\right)(3-1) + \left(\frac{1}{4}\right)(4-1) \\ &= \frac{2}{3} + \frac{1}{4} = \frac{11}{12} \end{aligned}$$

5. Let  $G(x) = \int_{x^3}^1 \sin(t^2) dt$ . Then  $G'(1) =$

$$G(x) = - \int_1^{x^3} \sin(t^2) dt$$

$$\Rightarrow G'(x) = - \left( \sin(x^3)^2 \right) (3x^2)$$

$$G'(1) = -(\sin 1)(3)$$

A.  $3 \sin 1$ 

B. 1

C.  $-5 \sin 1$ 

D. -3

E.  $-3 \sin 1$ 

6. Find  $a$  and  $b$  such that

$$\int_2^3 e^{x^2} dx - \int_a^b e^{x^2} dx = \int_4^3 e^{x^2} dx$$

A.  $a = 2, b = 3$ B.  $a = 2, b = 4$ C.  $a = 3, b = 4$ D.  $a = 4, b = 3$ E.  $a = 4, b = 2$ 

$$\Rightarrow \int_2^3 e^{x^2} dx - \int_a^b e^{x^2} dx = - \int_3^4 e^{x^2} dx$$

$$\Rightarrow \int_2^3 e^{x^2} dx + \int_3^4 e^{x^2} dx = \int_a^b e^{x^2} dx$$

$$\Rightarrow \int_2^4 e^{x^2} dx = \int_a^b e^{x^2} dx$$

$$\Rightarrow a = 2, b = 4$$

7. For what value of  $k$  can the following integral be evaluated directly using a substitution.

$$5 \int e^{t^3} t^k dt$$

Let  $u = t^3$ . Then  $du = 3t^2 dt$ , and  
then  $t^2 dt = \frac{1}{3} du$ . Substituting gives,

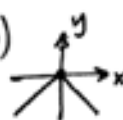
$$5 \int e^{t^3} t^2 dt = 5 \int e^u \frac{1}{3} du.$$

- A.  $k = 0$   
B.  $k = 1$   
C.  $k = 2$   
D.  $k = 3$   
E.  $k = 4$

8. True-false: a statement is false unless true in all situations.

- a. At a local maximum of a continuous function  $f$  we have  $f'(x) = 0$ .

False. Let  $y = |x|$ .  $y$  has a  
local max at  $x=0$  but  $y'(0)$   
does not exist.



FALSE

- b. If  $f'(x) > 0$  on  $(a, b)$  the graph of  $f$  is concave up.

False. Concavity determined by  
second derivative, not the first.  
Let  $f(x) = x^3$ .  $f'(x) = 3x^2$ .  $f''(x) = 6x$ .



FALSE

concave down but increasing

- c.  $\int \ln x dx = \frac{1}{x} + C$

$$\frac{d}{dx} \left( \frac{1}{x} \right) \neq \ln x.$$

False.

- d.  $\int_0^x \sin t dt$  is increasing for  $\frac{\pi}{2} < x < \pi$ .

$$\frac{d}{dx} \int_0^x \sin t dt = \sin x \text{ and}$$

$$\sin x > 0 \text{ for } \frac{\pi}{2} < x < \pi.$$

TRUE

9. Compute the following integrals

a)  $\int \frac{e^{\sqrt{x}}}{\sqrt{x}} dx =$

Let  $u = \sqrt{x}$ . Then  $du = \frac{1}{2\sqrt{x}} dx$  and  $\frac{1}{\sqrt{x}} dx = 2 du$ .

$$\begin{aligned} \int \frac{e^{\sqrt{x}}}{\sqrt{x}} dx &= \int e^{\sqrt{x}} \cdot \frac{1}{\sqrt{x}} dx = \int e^u \cdot 2 du \\ &= 2 \int e^u du = 2e^u + C = 2e^{\sqrt{x}} + C \end{aligned}$$

$$2e^{\sqrt{x}} + C$$

b)  $\int \frac{x^3}{1+x^4} dx =$

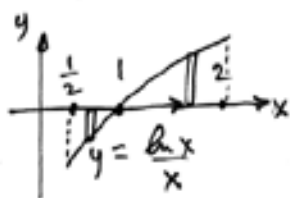
Let  $u = 1+x^4$ . Then  $du = 4x^3 dx$  and  $x^3 dx = \frac{1}{4} du$ .

$$\begin{aligned} \int \frac{x^3}{1+x^4} dx &= \int \frac{1}{1+x^4} x^3 dx = \int \frac{1}{u} \cdot \frac{1}{4} du \\ &= \frac{1}{4} \int \frac{1}{u} du = \frac{1}{4} \ln |u| + C = \frac{1}{4} \ln (1+x^4) + C \end{aligned}$$

$$\frac{1}{4} \ln (1+x^4) + C$$

10. Give the area between the graph of  $f(x) = \frac{\ln x}{x}$  and the  $x$  axis for  $\frac{1}{2} \leq x \leq 2$  as a sum or difference of definite integrals of  $\frac{\ln x}{x}$  (do not use absolute values). Do not integrate.

$\frac{\ln x}{x} < 0$  for  $\frac{1}{2} \leq x < 1$  and  $\frac{\ln x}{x} > 0$  for  $1 < x \leq 2$ .  $\frac{\ln 1}{1} = 0$ .  
It's not necessary to have an accurate graph of  $y = \frac{\ln x}{x}$ , but you must know whether it's above or below the  $x$ -axis.



$$\text{Area} = \int_{\frac{1}{2}}^1 (0 - \frac{\ln x}{x}) dx + \int_1^2 (\frac{\ln x}{x} - 0) dx$$

$$= -\int_{\frac{1}{2}}^1 \frac{\ln x}{x} dx + \int_1^2 \frac{\ln x}{x} dx$$

11. In the boxes indicate the substitutions to allow the integrals below to be integrated directly. Do not integrate. (9 points)

$$\begin{aligned} \text{a) } \int x\sqrt{x+3} dx &= \int (u-3)u^{1/2} du \\ u = x+3 \rightarrow du = dx &= \int (u^{3/2} - 3u^{1/2}) du \\ \rightarrow x = u-3 & \end{aligned}$$

$$u = x+3$$

$$\begin{aligned} \text{b) } \int (\ln x)^3 x^{-1} dx &= \int u^3 du \\ u = \ln x \rightarrow du = \frac{1}{x} dx & \end{aligned}$$

$$u = \ln x$$

$$\begin{aligned} \text{c) } \int \tan^5 x \sec^2 x dx &= \int u^5 du \\ u = \tan x \rightarrow du = \sec^2 x dx & \end{aligned}$$

$$u = \tan x \text{ (or } u = \sec x)$$

note: if  $u = \sec x$  then  $du = \sec x \tan x dx$

$$\begin{aligned} \int \tan^5 x \sec^2 x dx &= \int \tan^4 x \sec x \sec x \tan x dx \\ &= \int (\sec^2 x - 1)^2 \sec x \sec x \tan x dx \\ &= \int (\sec^5 x - 2 \sec^3 x + \sec x) \sec x \tan x dx \\ &= \int (u^5 - 2u^3 + u) du \end{aligned}$$

12. Sketch the graph of  $f(x) = \ln(e^x + e^{-x})$ . Find first and second derivatives and all relative extrema, intervals where graph is concave up and where concave down, and points of inflection. (11 points)

$$f'(x) = \frac{e^x - e^{-x}}{e^x + e^{-x}} = 0 \rightarrow e^x - e^{-x} = 0 \rightarrow e^x = e^{-x} \rightarrow e^{2x} = e^0$$

$$\rightarrow 2x = \ln e^0 \rightarrow 2x = 0 \rightarrow x = 0.$$

$$f''(x) = \frac{(e^x - (-e^{-x}))(e^x + e^{-x}) - (e^x - e^{-x})(e^x - e^{-x})}{(e^x + e^{-x})^2}$$

$$= \frac{(e^{2x} + 2 + e^{-2x}) - (e^{2x} - 2 + e^{-2x})}{(e^x + e^{-x})^2}$$

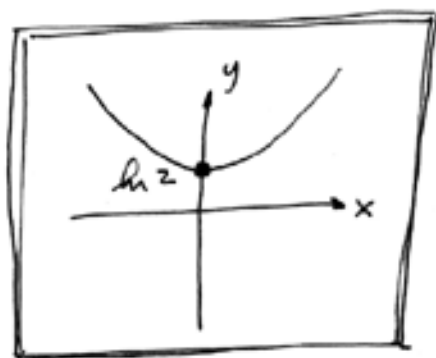
$$= \frac{4}{(e^x + e^{-x})^2}$$

$f''(x) > 0$  for all  $x \rightarrow$  no inflection pt.

sign of  $f'(x)$

$e^x - e^{-x}$	-	0	+
$f$	dec	↓	inc
rel. min			

$f(0) = \ln 2$



$$f'(x) = \frac{e^x - e^{-x}}{e^x + e^{-x}}$$

$$f''(x) = \frac{4}{(e^x + e^{-x})^2}$$

rel. max. at: none

rel. min. at:  $x = 0$

concave up on: all  $x$

concave down on: none

points of inflection: none