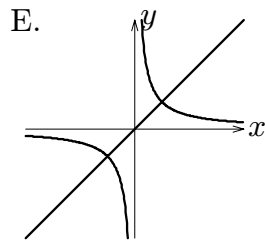
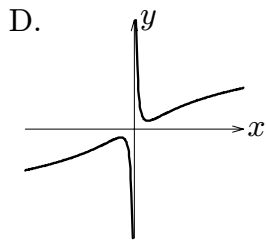
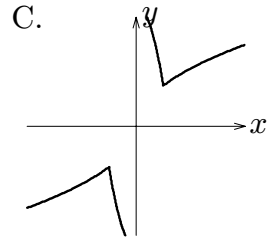
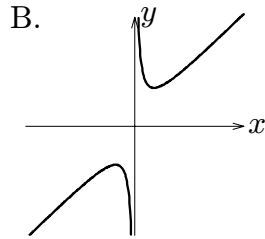
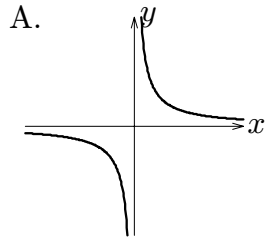


1. The function $f(x) = x^4 - 8x^3 + 24x^2 - 7\pi$ has
- A. no inflection points
 - B. two inflection points at $x = 1$ and $x = 4$
 - C. an inflection point at $x = 2$
 - D. an inflection point at $x = 0$
 - E. two inflection points at $x = 0$ and $x = 4$

2. The limit $\lim_{x \rightarrow \infty} \frac{2 - 3x - 4x^2}{10 + 6x + 3x^2}$.
- A. does not exist
 - B. $= 0$
 - C. $= \frac{1}{5}$
 - D. $= -\infty$
 - E. $= -\frac{4}{3}$

3. The graph of $f(x) = x + \frac{4}{x}$ looks most like which graph below?



4. The graph of $f(x) = 3x^5 - 5x^3$ is concave downward on the interval(s).

A. $(-\infty, -\frac{1}{2}) \cup (0, \frac{1}{2})$

B. $(-\frac{1}{2}, 0) \cup (\frac{1}{2}, \infty)$

C. $(-\infty, -\frac{\sqrt{2}}{2}) \cup (0, \frac{\sqrt{2}}{2})$

D. $(-\frac{\sqrt{2}}{2}, 0) \cup (\frac{1}{2}, \infty)$

E. none of the above

5. If $f(x) = x^2 - 1$ and $P = \{-\frac{1}{2}, 0, 1, 2\}$, then the upper sum $U_f(P) =$

A. $-\frac{11}{8}$

B. $-\frac{3}{8}$

C. 0

D. $\frac{20}{8}$

E. $\frac{21}{8}$

6. The values of a and b which guarantee that

$$\int_a^b f(t)dt - \int_5^3 f(t)dt = \int_3^1 f(t)dt \text{ are}$$

A. $a = 5, b = 1$

B. $a = 4, b = 2$

C. $a = 2, b = 4$

D. $a = 1, b = 2$

E. $a = 3, b = 1$

7. If $f(x) = \begin{cases} 4, & 1 \leq x \leq 3 \\ 2x - 2, & 3 < x \leq 4 \end{cases}$, then $\int_1^4 f(x)dx =$

A. 3

B. 8

C. 13

D. 18

E. 23

8. If $F(x) = \int_2^{x^4} \sin t^2 dt$, then $F'(a) =$

- A. $a^4 \sin a^8$
- B. $4a^3 \sin a^2$
- C. $a^4 \cos a^2$
- D. $4a^3 \cos a^2$
- E. $4a^3 \sin a^8$

9. $\int_1^2 \left(x + \frac{1}{x}\right)^2 dx =$

- A. $\frac{31}{6}$
- B. $\frac{29}{6}$
- C. $\frac{23}{6}$
- D. $\frac{20}{6}$
- E. $\frac{17}{6}$

10. The function $F(x) = \int_0^x (\sqrt{t} - t^3) dt$ is increasing for

- A. $0 < x < 1$
- B. $x > 0$
- C. $x > \sqrt[3]{2}$
- D. $0 < x < \sqrt[3]{2}$
- E. $x > 1$

11. $\int_0^{\frac{1}{2}} \frac{3x}{(x^2 - 1)^2} dx =$

- A. $\frac{1}{2}$
- B. $\frac{3}{4}$
- C. 2
- D. 3
- E. 4