

Curl.

Suppose  $\vec{F} = P\vec{i} + Q\vec{j} + R\vec{k}$

has coefficients that are  $C_1$ .

We define

$$\text{curl } \vec{F} = \begin{vmatrix} \vec{i} & \vec{j} & \vec{k} \\ \frac{\partial}{\partial x} & \frac{\partial}{\partial y} & \frac{\partial}{\partial z} \\ P & Q & R \end{vmatrix}$$

$$= \left( \frac{\partial R}{\partial y} - \frac{\partial Q}{\partial z} \right) \vec{i} + \left( \frac{\partial P}{\partial z} - \frac{\partial R}{\partial x} \right) \vec{j} + \left( \frac{\partial Q}{\partial x} - \frac{\partial P}{\partial y} \right) \vec{k}$$

$$\text{Ex. If } \vec{F} = (x^2 - y)\vec{i} + 4z\vec{j} + x^2\vec{k}^{0.2}$$

Find curl  $\vec{F}$

$$= \begin{vmatrix} \vec{i} & \vec{j} & \vec{k} \\ \frac{\partial}{\partial x} & \frac{\partial}{\partial y} & \frac{\partial}{\partial z} \\ x^2 - y & 4z & x^2 \end{vmatrix}$$

$$= (0 - 4)\vec{i} - (2x - 0)\vec{j} + (0 + 1)\vec{k}$$

$$= -4\vec{i} - 2x\vec{j} + \vec{k}$$

Using Vector notation ( $\nabla$ )

$$\text{curl } \vec{F} = \nabla \times \vec{F} \quad \text{and if}$$

$f$  is a scalar function,

$$\nabla f = \frac{\partial f}{\partial x} \vec{i} + \frac{\partial f}{\partial y} \vec{j} + \frac{\partial f}{\partial z} \vec{k}.$$

Hence,  $\text{del } f = \text{grad } f,$

Important Identity.

$$\text{curl grad } f = 0$$

$$\text{or } \nabla \times \nabla f = 0.$$

# 16.6 Parametric Surfaces

# 38. p. 1098

Maxwell's Equations. Let  $\vec{E}(x_1, x_2, x_3, t)$

and  $\vec{H}(x_1, x_2, x_3, t)$  denote the electrical

and magnetic field at  $(x_1, x_2, x_3, t)$

Maxwell showed that  $\vec{E}$  and  $\vec{H}$

satisfy

$$\operatorname{div} \vec{E} = \vec{0} \quad \operatorname{div} \vec{H} = 0$$

$$\operatorname{curl} \vec{E} = -\frac{1}{c} \frac{\partial \vec{H}}{\partial t} \quad \operatorname{curl} \vec{H} = \frac{1}{c} \frac{\partial \vec{E}}{\partial t}$$

He showed that light is an

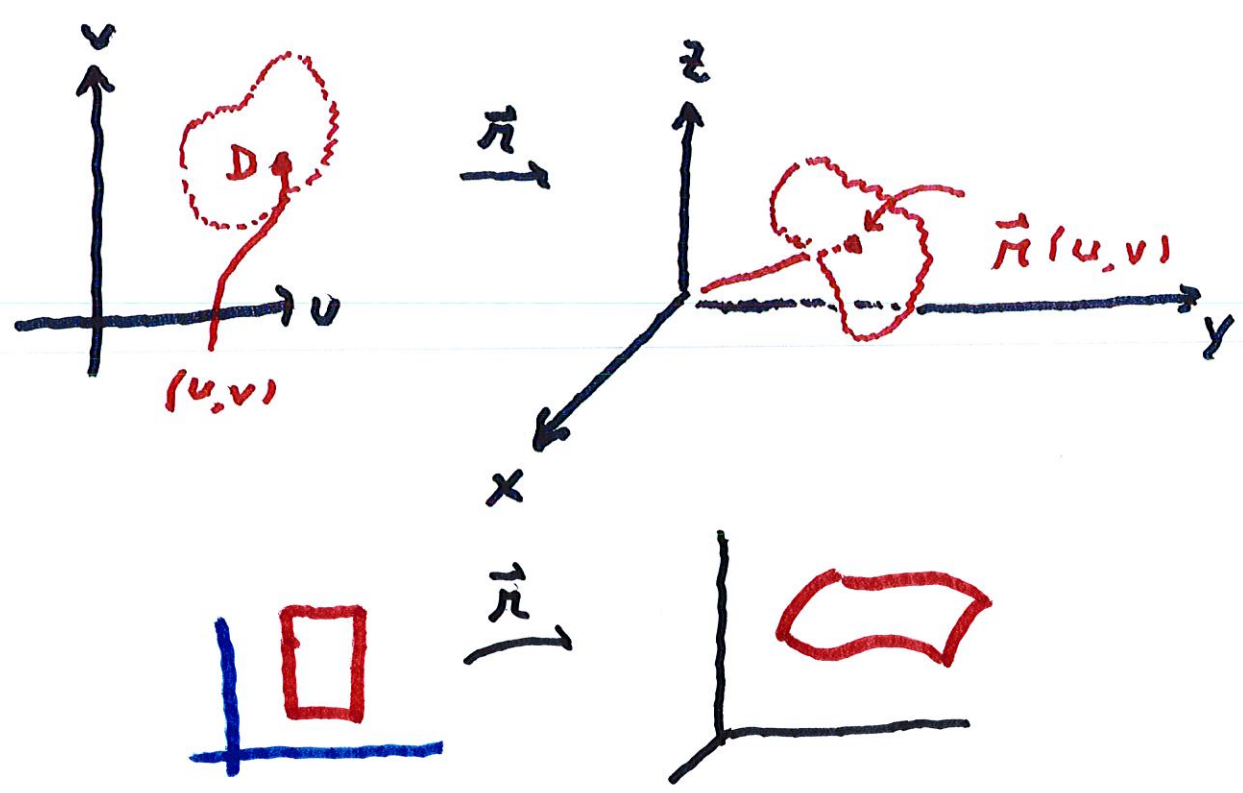
electro-magnetic wave with  $c =$

speed of light.

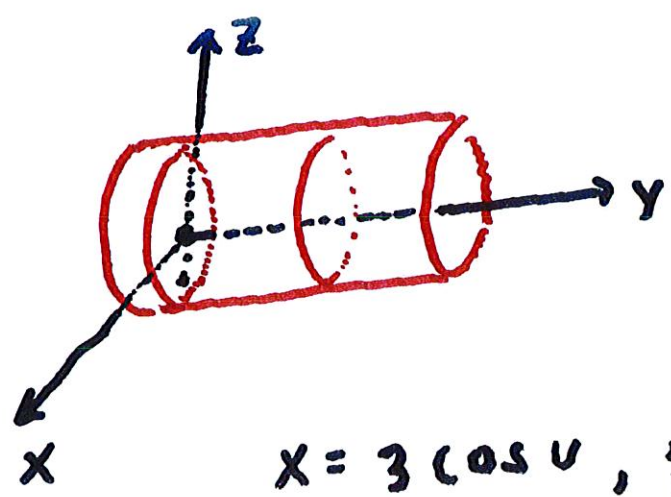
16.6 We can describe a surface by

$$\vec{r}(u,v) = x(u,v)\vec{i} + y(u,v)\vec{j} + z(u,v)\vec{k}$$

As  $u$  and  $v$  change they describe  
a surface in  $\mathbb{R}^3$ .



Ex. A cylinder of radius 3 :



$$x = 3 \cos u, \quad z = 3 \sin u, \quad y = v$$



or:

$$\vec{r}(u, v) = 3 \cos u \vec{i} + v \vec{j} + 3 \sin u \vec{k}$$

Spherical Coord:

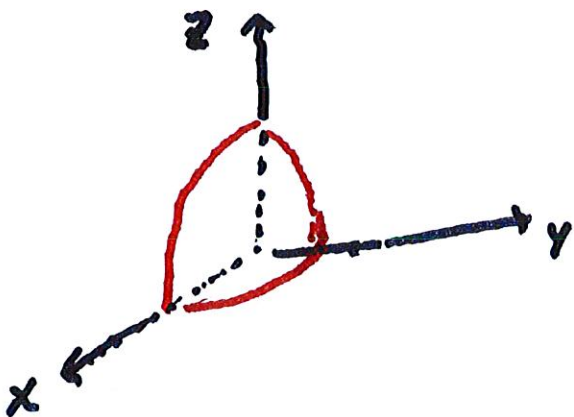
$$x(\theta, \phi) = 4 \cos \theta \sin \phi$$

$$y(\theta, \phi) = 4 \sin \theta \sin \phi$$

$$z(\theta, \phi) = 4 \cos \phi$$

$$0 < \theta < \frac{\pi}{2}$$

$$0 < \phi < \frac{\pi}{2}$$

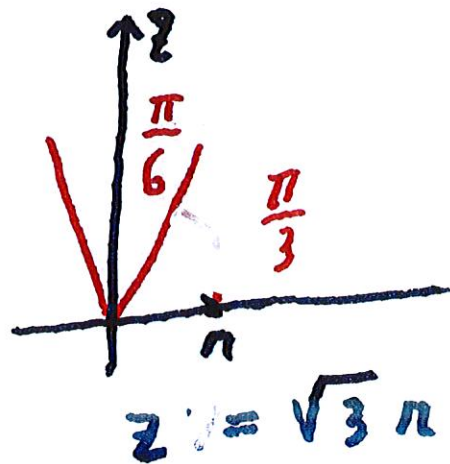


A sphere of radius  
4 in first octant

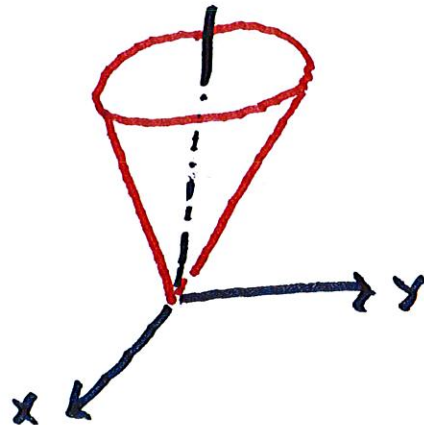
Ex. Give a parameterization of  
the top half of the cone with

angle  $\frac{\pi}{6}$  from the central axis

First when  $x=0$



Now with  $x \neq 0$ ,  $z = \sqrt{3} \sqrt{x^2 + y^2}$

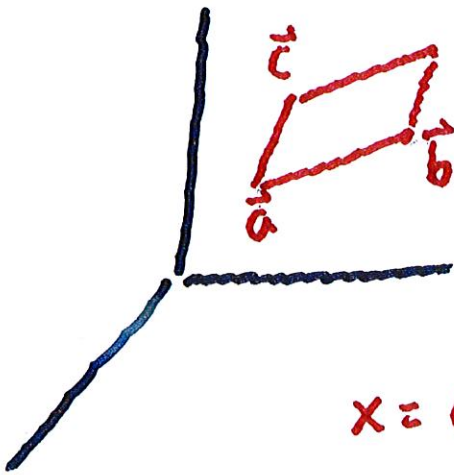




$\vec{a}$ ,  $\vec{b}$ , and  $\vec{c}$ :

$$(u, v) \rightarrow \vec{a} + u(\vec{b} - \vec{a}) + v(\vec{c} - \vec{a})$$

for  $0 \leq u \leq 1$  and  $0 \leq v \leq 1$



$$\vec{r}(u, v) = u(\vec{b} - \vec{a}) + v(\vec{c} - \vec{a})$$

$$x = a_1 + u(b_1 - a_1) + v(c_1 - a_1)$$

$$y = a_2 + u(b_2 - a_2) + v(c_2 - a_2)$$

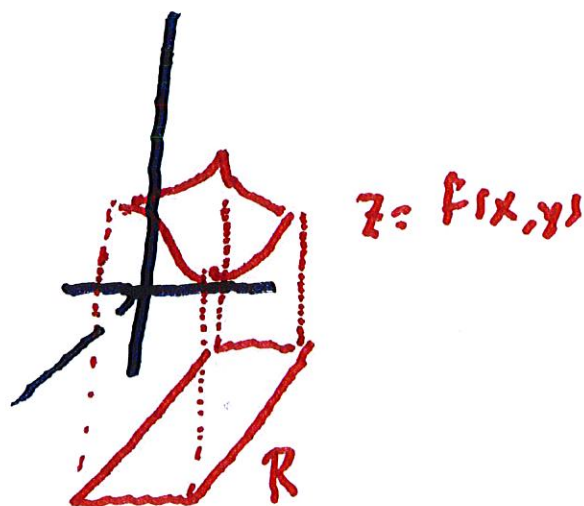
$$z = a_3 + u(b_3 - a_3) + v(c_3 - a_3)$$

Write a parameterization

of the graph of  $f(x,y)$  for

$(x,y) \in D$

$S = \text{graph of}$   
 $f \text{ over } R$

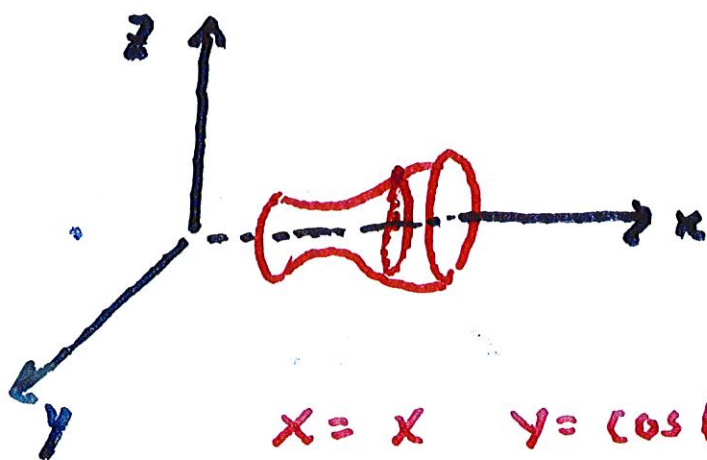


$$(u,v) \in R \xrightarrow{\vec{r}} (u, v, f(u,v))$$

## Surfaces of Revolution

Revolve  $y = f(x)$ ,  $a \leq x \leq b$

about the  $x$ -axis




$$x = x \quad y = \cos \theta f(x) \quad z = \sin \theta f(x)$$

When  $\theta = 0$ , we get the usual

curve  $y = f(x)$ .

When  $\theta = \frac{\pi}{2}$ , we get  $y = f(x)$

Ex. Find a parameterization of  
 the surface obtained by  
 rotating the curve  $y = e^{-x}$  for  
 $0 \leq x \leq 4$  about the  $x$ -axis



$$x = x$$

$$y = e^{-x} \cos \theta$$

$$z = e^{-x} \sin \theta$$

$$0 \leq \theta \leq 2\pi$$

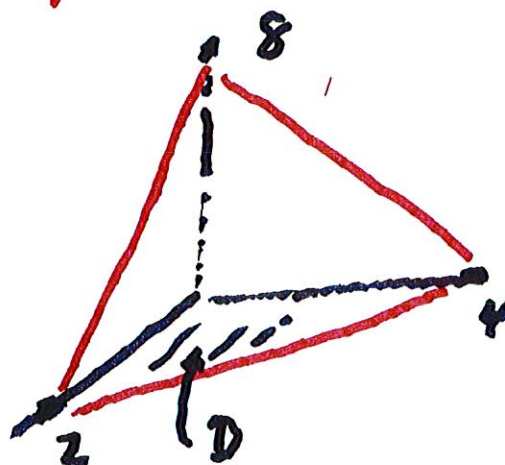
$$\therefore (x, \theta) \rightarrow \vec{r}_0 = (x, \cos \theta f(x), \sin \theta f(x))$$

$$\text{for } 0 \leq x \leq 4$$

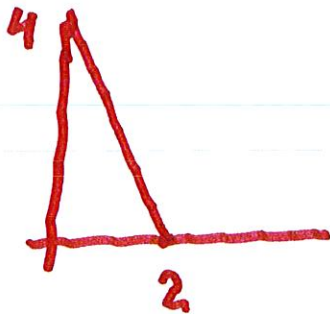
$$\text{and } 0 \leq \theta \leq 2\pi$$

Find a parameterization  
of the triangle in the first  
octant generated by

$$4x + 2y + z = 8$$



Let  $D$  = base in the plane  $z=0$



$$4x + 2y = 8$$

$$\text{or } 2x + y = 4$$

$$0 < z < 8 - 4x - 2y$$

$$\begin{aligned} 0 < y < 4 - 2x \\ x > 0, y > 0 \end{aligned}$$

$D$  ↑

$$\text{or } 0 \leq v \leq 4 - 2u$$

$$u \geq 0, v \geq u$$

$$z = 8 - 4u - 2v$$



We study how  $\vec{\Pi}(u, v)$  when we only

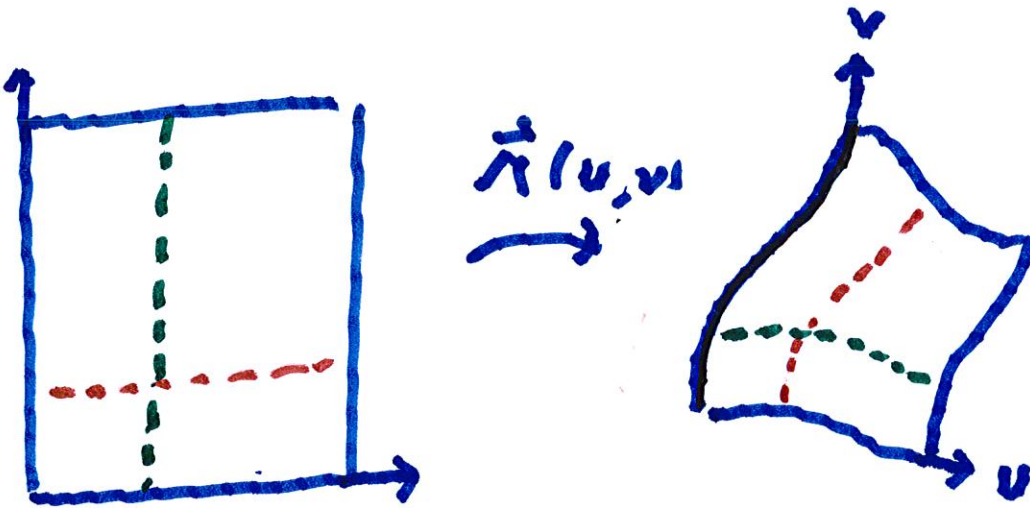
let  $u$  change

$$\vec{\Pi}_u = \frac{\partial x}{\partial u}(u_0, v_0) \vec{i} + \frac{\partial y}{\partial u}(u_0, v_0) \vec{j} + \frac{\partial z}{\partial u}(u_0, v_0) \vec{k}$$

and then only let  $v$  change:

$$\vec{\Pi}_v = \frac{\partial x}{\partial v}(u_0, v_0) \vec{i} + \frac{\partial y}{\partial v}(u_0, v_0) \vec{j} + \frac{\partial z}{\partial v}(u_0, v_0) \vec{k}$$

First, we want to allow  $u$  to change when  $v = v_0$  is fixed.



This gives a curve

$$u \rightarrow \vec{\pi}(u, v_0) \approx \vec{\pi}(u_0, v_0)$$

$$+ \frac{\partial \vec{\pi}}{\partial u}(u_0, v_0) (u - u_0)$$

Similarly, the green curve

is approximated by

$$v \rightarrow \vec{\pi}(u_0, v) \approx \vec{\pi}(u_0, v_0) + \frac{\partial \vec{\pi}}{\partial v}(u_0, v_0)(v - v_0).$$

If we subdivide the intervals

by

$$u_0 < u_1, \dots, u_{m-1}, < u_m$$

and

$$v_0 < v_1, \dots, < v_{m-1}, < v_n$$

If we choose various values of  $u_0$  and  $v_0$ , we obtain a family of grid curves.

The horizontal and vertical sides of the red square are mapped

to  $\frac{\partial \vec{\pi}}{\partial u}(u_0, v_0) \Delta x$  and  $\frac{\partial \vec{\pi}}{\partial v}(u_0, v_0) \Delta y$

These sides generate a parallelogram with

$$\text{Area} \approx \left| \frac{\partial \vec{r}}{\partial u} (u_0, v_0) \times \frac{\partial \vec{r}}{\partial v} (u_0, v_0) \right| \cdot \Delta u \Delta v.$$