

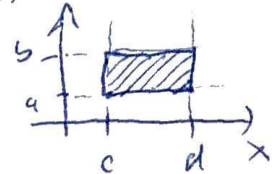
MA 16020 Lesson 28: Double integrals II

Recall (integrals over rectangles): Given a function $z = f(x, y)$ of two variables, the double integrals

$$\int_a^b \left(\int_c^d f(x, y) dx \right) dy, \quad \int_c^d \left(\int_a^b f(x, y) dy \right) dx$$

both compute the volume of the region below $z = f(x, y)$ and above the rectangle:

$$R = \{ (x, y) \mid c \leq x \leq d, a \leq y \leq b \}$$



Let us denote this common integral by $\iint_R f(x, y) dA$.

Integrals over regions in a plane. Given a (reasonably complicated/simple) region R in the xy -plane, the integral $\iint_R f(x, y) dA$ still makes sense. To compute it, we may consider two basic ways of going through all of the points of the region:

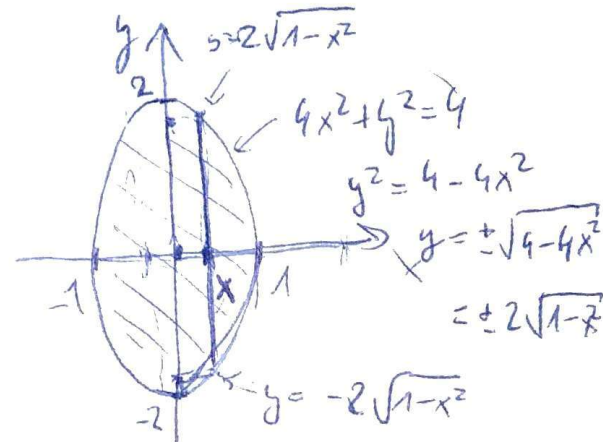
Example. Let R be the interior of the ellipse $4x^2 + y^2 = 4$. We want to compute $\iint_R (\sqrt{4 - y^2} + 2x) dA$.

1. **First way:** Give lower and upper limits for the x -coordinates of points present, then give lower and upper limits (possibly depending on x) for the corresponding y -coordinates.

$$-1 \leq x \leq 1$$

for fixed x ,

$$-2\sqrt{1-x^2} \leq y \leq 2\sqrt{1-x^2}$$



This way, we obtain

$$\iint_R (\sqrt{4 - y^2} + 2x) dA = \int_{-1}^1 \int_{-2\sqrt{1-x^2}}^{2\sqrt{1-x^2}} (\sqrt{4 - y^2} + 2x) dy dx$$

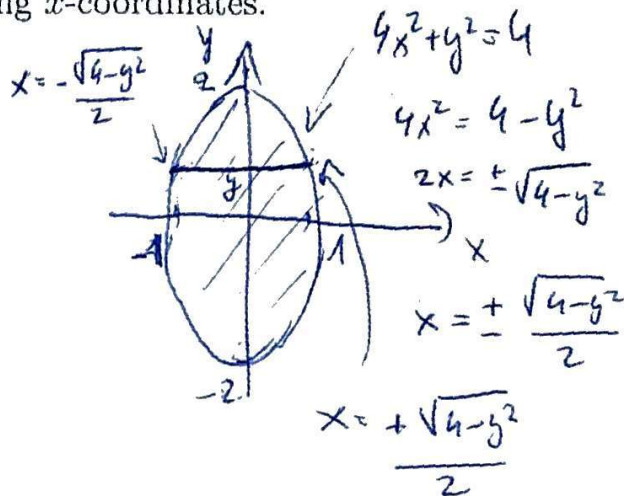
1
complicated

2. **Second way (the other way round):** Give lower and upper limits for the y -coordinates of points present, then give lower and upper limits (possibly depending on y) for the corresponding x -coordinates.

$$-2 \leq y \leq 2$$

Depends on y ,

$$-\frac{\sqrt{4-y^2}}{2} \leq x \leq \frac{\sqrt{4-y^2}}{2}$$



This way, we obtain

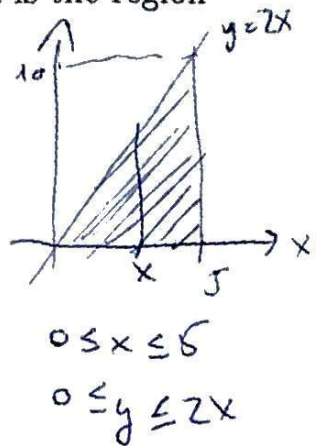
$$\iint_R (\sqrt{4-y^2} + 2x) dA = \int_{-2}^2 \int_{-\frac{\sqrt{4-y^2}}{2}}^{\frac{\sqrt{4-y^2}}{2}} (\sqrt{4-y^2} + 2x) dx dy$$

Finally, let us compute the integral:

$$\begin{aligned} \int_{-2}^2 \left(\int_{-\frac{\sqrt{4-y^2}}{2}}^{\frac{\sqrt{4-y^2}}{2}} (\sqrt{4-y^2} + 2x) dx \right) dy &= \int_{-2}^2 \left[\sqrt{4-y^2} \cdot x + x^2 \right]_{-\frac{\sqrt{4-y^2}}{2}}^{\frac{\sqrt{4-y^2}}{2}} dy \\ &= \int_{-2}^2 \left(\left(\sqrt{4-y^2} \cdot \frac{\sqrt{4-y^2}}{2} + \left(\frac{\sqrt{4-y^2}}{2} \right)^2 \right) - \left(\sqrt{4-y^2} \cdot \left(-\frac{\sqrt{4-y^2}}{2} \right) + \left(-\frac{\sqrt{4-y^2}}{2} \right)^2 \right) \right) dy \\ &= \int_{-2}^2 \left(\left(\frac{4-y^2}{2} + \frac{4-y^2}{4} \right) - \left(-\frac{4-y^2}{2} + \frac{4-y^2}{4} \right) \right) dy \\ &= \int_{-2}^2 (4-y^2) dy = \left[4y - \frac{y^3}{3} \right]_{-2}^2 = \left(4 \cdot 2 - \frac{2^3}{3} \right) - \left(4 \cdot (-2) - \frac{(-2)^3}{3} \right) \\ &= 16 - \frac{16}{3} = \frac{32}{3} \end{aligned}$$

Exercise 1. Evaluate the integral $\iint_R (x^2 + y^2) dA$, where R is the region bounded by the lines $y = 2x$, $x = 5$ and the x -axis.

$$\begin{aligned} \iint_R (x^2 + y^2) dA &= \int_0^5 \int_0^{2x} (x^2 + y^2) dy dx = \\ &= \int_0^5 \left[x^2 y + \frac{y^3}{3} \right]_0^{2x} dx = \int_0^5 \left(x^2 \cdot (2x) + \frac{(2x)^3}{3} \right) dx = \\ &= \int_0^5 \frac{14}{3} x^3 dx = \left[\frac{14}{12} x^4 \right]_0^5 = \end{aligned}$$



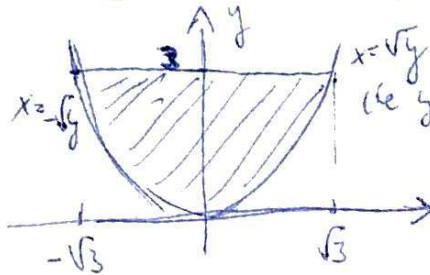
$$= \frac{14 \cdot 5^4}{12} \quad (\approx 729.167)$$

Exercise 2. Switch the order of integration for the integral

$$(*) = \int_0^3 \int_{-\sqrt{y}}^{\sqrt{y}} f(x, y) dx dy.$$

Need to sketch the region indicated by integration limits:

$$\begin{aligned} 0 \leq y \leq 3, \\ -\sqrt{y} \leq x \leq \sqrt{y} \end{aligned}$$



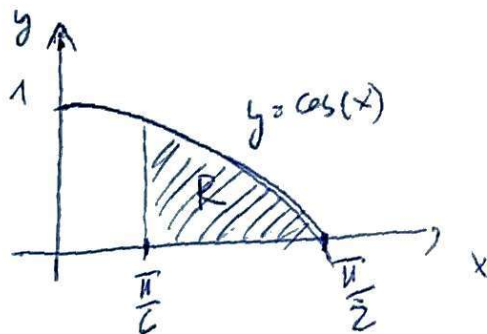
$$\begin{aligned} \leadsto \text{get} \\ -\sqrt{3} \leq x \leq \sqrt{3}, \\ x^2 \leq y \leq 3 \end{aligned}$$

$$\leadsto (*) = \int_{-\sqrt{3}}^{\sqrt{3}} \int_{x^2}^3 f(x, y) dy dx$$

Exercise 3. Evaluate the integral

$$\iint_R 6 \sin^2(x) dA,$$

where R is the region bounded by the curves $y = \cos(x)$, $x = \pi/6$, $x = \pi/2$ and the x -axis.



$$\sim) \frac{\pi}{6} \leq x \leq \frac{\pi}{2},$$

$$0 \leq y \leq \cos(x)$$

$$\hookrightarrow \iint_R 6 \sin^2(x) dA = \int_{\frac{\pi}{6}}^{\frac{\pi}{2}} \left(\int_0^{\cos(x)} 6 \sin^2(x) dy \right) dx = \int_{\frac{\pi}{6}}^{\frac{\pi}{2}} \left[6 \sin^2(x) y \right]_0^{\cos(x)} dx =$$

$$= \int_{\frac{\pi}{6}}^{\frac{\pi}{2}} 6 \sin^2(x) \cos(x) dx = \begin{cases} u = \sin(x) \\ du = \cos(x) dx \\ x = \frac{\pi}{6} \sim) u = \frac{1}{2} \\ x = \frac{\pi}{2} \sim) u = 1 \end{cases} = \int_{\frac{1}{2}}^1 6 u^2 du =$$

$$= \left[2u^3 \right]_{\frac{1}{2}}^1 = 2 - 2 \cdot \left(\frac{1}{2}\right)^3 = 2 - \frac{1}{4} = \underline{\underline{\frac{7}{4}}}$$

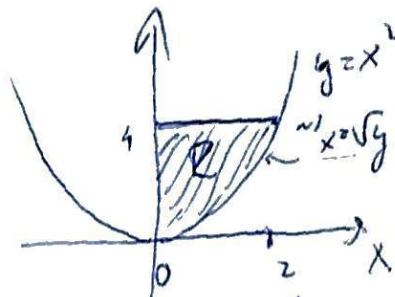
Exercise 4 (time permitting). Evaluate the integral

$$(*) = \int_0^2 \int_{x^2}^4 2x\sqrt{3+y^2} dy dx,$$

directly... difficult (integrating $\sqrt{3+y^2}$) \Rightarrow we switch the order of integration:

$$0 \leq x \leq 2$$

$$x^2 \leq y \leq 4$$



$$\begin{cases} 0 \leq y \leq 4, \\ 0 \leq x \leq \sqrt{y} \end{cases}$$

$$(*) = \int_0^4 \left(\int_0^{\sqrt{y}} 2x\sqrt{3+y^2} dx \right) dy = \int_0^4 \left[x^2 \cdot \sqrt{3+y^2} \right]_0^{\sqrt{y}} dy =$$

$$= \int_0^4 y \cdot \sqrt{3+y^2} dy = \left. \begin{array}{l} u = 3+y^2 \\ du = +2y dy \\ y=0 \sim u=3 \\ y=4 \sim u=19 \end{array} \right| \begin{array}{l} = \int_3^{19} \frac{\sqrt{u}}{(2)} du = \end{array}$$

$$= \left[\frac{1}{2} \cdot \frac{2}{3} u^{\frac{3}{2}} \right]_3^{19} = \left[\frac{1}{3} u^{\frac{3}{2}} \right]_3^{19} = \frac{1}{3} \left(19^{\frac{3}{2}} - 3^{\frac{3}{2}} \right)$$

$$\underline{\underline{(\approx 25.874)}}$$